

Q: 3 (Page: 16) Put $>$ or $<$ in the blanks' Ch-1

(i) $7 > 5$ $8 < 15$ $3 > 1$ $4 = 4$

(ii) $10 < 12$ $15 > 9$ $15 = 15$ $11 < 19$

Q: Cross the smallest number and circle the biggest number!

16 ~~\times~~ (18) (20) ~~\times~~ 12 ~~\times~~ 10 (19) (18) ~~\times~~ 14

Q: What Comes:

| Before | |
|--------|----|
| 8 | 9 |
| 5 | 6 |
| 12 | 13 |
| 17 | 18 |

| After | |
|-------|----|
| 5 | 6 |
| 2 | 3 |
| 16 | 17 |
| 11 | 12 |

| Between | | |
|---------|----|----|
| 1 | 2 | 3 |
| 15 | 16 | 17 |
| 7 | 8 | 9 |
| 14 | 15 | 16 |

Q: Pick the correct answer! (Page 17)

(a) 1 more than 15 is 15 16 17

(b) 1 less than 19 is 18 16 17

(c) 7 comes before 8 7 9 10

(d) 13 comes after 12 13 17 15

Q: What Comes before

(i) 3 4

(ii) 18 19

(iii) 15 16

(iv) 17 18

Q:4 Write the numbers for the following number name!

Page: 10

Sixteen

Eleven

Fifteen

Eighteen

Seven

Twelve

Q:5 Write the number names for the following numbers!

15 Fifteen

12 Twelve

19 Nineteen

20 Twenty

Q:6 Complete the following!

| | | | | | | | | | |
|----|----|----|----|----|----|----|----|----|----|
| 1 | 2 | 3 | 4 | 5 | 6 | 7 | 8 | 9 | 10 |
| 11 | 12 | 13 | 14 | 15 | 16 | 17 | 18 | 19 | 20 |

Q:7 Now look at the number strip and fill in the blanks!

| | | | | |
|---|---|---|---|---|
| 4 | 5 | 6 | 7 | 8 |
|---|---|---|---|---|

| | | | | |
|----|----|----|----|----|
| 14 | 15 | 16 | 17 | 18 |
|----|----|----|----|----|






| | | | | |
|----|----|----|----|----|
| 16 | 17 | 18 | 19 | 20 |
|----|----|----|----|----|

| | | | | |
|---|----|----|----|----|
| 9 | 10 | 11 | 12 | 13 |
|---|----|----|----|----|

| | | | | |
|---|---|---|----|----|
| 7 | 8 | 9 | 10 | 11 |
|---|---|---|----|----|

| | | | | |
|----|----|----|----|----|
| 10 | 11 | 12 | 13 | 14 |
|----|----|----|----|----|

2) Group the following as tens and ones. Write the number and the number name. (Page 17)

| | |
|---|--|
|  | <u>1</u> ten <u>7</u> ones = <u>17</u> Seventeen |
|  | <u>1</u> ten <u>4</u> ones = <u>14</u> Fourteen |
|  | <u>1</u> ten <u>5</u> ones = <u>15</u> Fifteen |
|  | <u>1</u> ten <u>9</u> ones = <u>19</u> Nineteen |
|  | <u>1</u> ten <u>2</u> ones = <u>12</u> Twelve |

(3) What comes before

3 4 18 19 15 16
17 18










(4) What comes after:

3 4 17 18 19 20 5 6

(5) What comes between:

3 4 5 8 9 10 11 12 13 17 18 19

Write the number and the number name:-

| | | | | | |
|--|---|---|---|-------|--------------|
|  | 1 | 1 | 1 | One | <u>One</u> |
|  | 2 | 2 | 2 | Two | <u>Two</u> |
|  | 3 | 3 | 3 | Three | <u>Three</u> |
|  | 4 | 4 | 4 | Four | <u>Four</u> |
|  | 5 | 5 | 5 | Five | <u>Five</u> |
|  | 6 | 6 | 6 | Six | <u>Six</u> |
|  | 7 | 7 | 7 | Seven | <u>Seven</u> |
|  | 8 | 8 | 8 | Eight | <u>Eight</u> |
|  | 9 | 9 | 9 | Nine | <u>Nine</u> |