

Book

Sanjeevani Public School

Subject - Maths Ch-4

Class - II

Progress in Mathematics

Ch-4 Numbers up to 1000 (Do this Assignment in book & copy.)

Q 52 Fill in the blanks:-

Three hundred

H	T	O
3	0	0

Five hundred

H	T	O
5	0	0

Seven hundred

H	T	O
7	0	0

Nine hundred

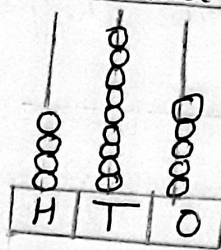
H	T	O
9	0	0

One hundred

= One thousand

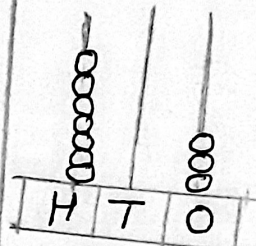
Th	H	T	O
1	0	0	0

Q 53 The abacus and write the number and number name: Do same as



H	T	O
4	9	5

Four hundred ninety-five



H	T	O
7	0	3

Seven hundred three

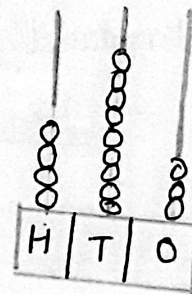
Q 55 4.1

407 → Seven hundred sixteen
 638 → Eight hundred forty-three
 359 → Four hundred seven
 716 → Five hundred eighty
 580 → Six hundred thirty-eight
 843 → Three hundred fifty-nine

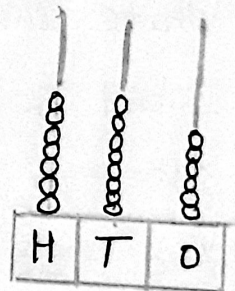
Write the number for:

- a) Four hundred thirty-seven 437
- b) Two hundred ninety-six 296
- c) Six hundred twenty-four 624
- d) Eight hundred nine 809
- e) Five hundred seventy-nine 579
- f) Seven hundred twenty-one 721
- g) Three hundred eighty-five 385
- h) Nine hundred thirty-four 934
- i) Six hundred eleven 611
- j) Four hundred one 401

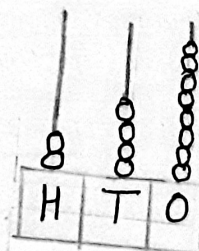
Draw beads to show the numbers: Do same as



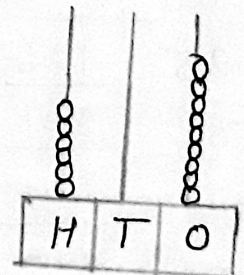
4	9	3
---	---	---



7	8	6
---	---	---



2	4	8
---	---	---



6	0	9
---	---	---

Book

Progress in Mathematics

Ch-4 Numbers up to 1000 (Do this Assignment in book & copy.)

Q 52 Fill in the blanks:-

Three hundred

H	T	O
3	0	0

Five hundred

H	T	O
5	0	0

Seven hundred

H	T	O
7	0	0

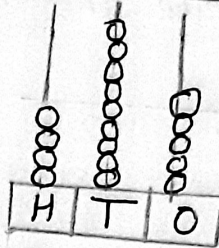
Nine hundred

H	T	O
9	0	0

One hundred = One thousand

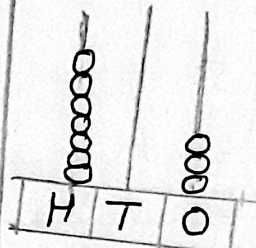
Th	H	T	O
1	0	0	0

Q 53 the abacus and write the number and number name: Do same as



H	T	O
4	9	5

Four hundred ninety-five



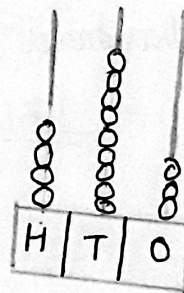
H	T	O
7	0	3

Seven hundred three

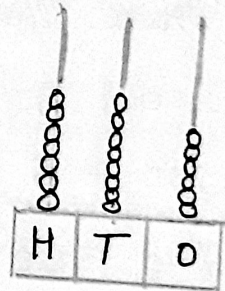
Q 55 4.1

407 → Seven hundred sixteen
 638 → Eight hundred forty-three
 359 → Four hundred seven
 716 → Five hundred eighty
 580 → Six hundred thirty-eight
 843 → Three hundred fifty-nine

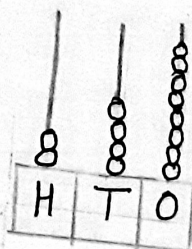
Draw beads to show the numbers: Do same as



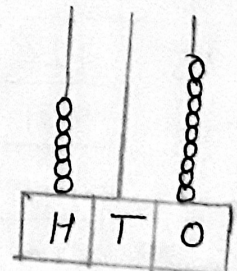
4	9	3
---	---	---



7	8	6
---	---	---



2	4	8
---	---	---



6	0	9
---	---	---

- Write the number for:
- Four hundred thirty-seven 437
 - Two hundred ninety-six 296
 - Six hundred twenty-four 624
 - Eight hundred nine 809
 - Five hundred seventy-nine 579
 - Seven hundred twenty-one 721
 - Three hundred eighty-five 385
 - Nine hundred thirty-four 934
 - Six hundred eleven 611
 - Four hundred one 401

Book
Progress in Mathematics

ch-4 kat 2 Numbers up to 1000 (Do this Assignment in book & copy.)

6. The place value of 959

- a) 5 in 759 is 50 b) 8 in 896 is 800
 c) 3 in 434 is 30 d) 7 in 257 is 7

Pg 61. Try these Put the sign $<$ or $>$ in the blanks:

2. a) 331, 239, 262, 478, 588 239, 262, 331, 478, 588
 b) 431, 411, 419, 405, 422 405, 411, 419, 422, 431
 c) 534, 435, 543, 453, 354 354, 435, 453, 534, 543
 d) 326, 623, 362, 632, 263 263, 326, 362, 623, 632

3. Arrange in descending order:

- a) 101, 110, 405, 450 450, 405, 110, 101
 b) 808, 809, 345, 567 809, 808, 567, 345
 c) 213, 322, 231, 113 322, 231, 213, 113
 d) 705, 607, 707, 506 707, 705, 607, 506

Pg 61. 4.3

1. Compare by using $<$, $>$ or $=$:

$15 > 8$	$93 < 432$	$198 > 98$	$209 > 57$
$639 = 639$	$754 < 763$	$845 > 785$	$695 > 427$
$654 = 654$	$452 > 209$	$684 < 856$	$951 > 159$

2. Circle the smallest number and cross the largest number:

<u>57</u> , 293, 47 ^x 8, 208	437, <u>283</u> , 67 ^x 3, 483
7 ^x 32, 198, 372, <u>134</u>	<u>120</u> , 81 ^x 9, 232, 667
<u>123</u> , 231, 3 ^x 21, 213	555, <u>444</u> , 666, 77 ^x 7

Pg 62 Q, 3, Q4 Do same as.

Pg 62. Mental Maths

1. The number for eight hundred five is 805.
2. In 457, the hundred digit is 400.
3. One more than the greatest 3-digit number is 1000.
4. The place value of 6 in 264 is 60.
5. In 189, the digit having greatest place value is 1.
6. The expanded form of 405 is $400 + 0 + 5$.
7. Which is greater: 358 or 308? 358.
8. The numbers which come between 568 and 572 are 569, 570, 571.
9. In short form $600 + 50 + 2$ is 652.
10. The digit whose place value remain always same is 0.

Pg 63 Tick the right answer:

- a) The place value of 7 in 197 is
7 70 700
- b) The short form of $700 + 8$ is
788 778 708
- c) The expanded form of 289 is
 $200 + 80 + 9$ $200 + 90 + 8$ $900 + 80 + 2$
- d) The face value of 5 in 759 is
50 5 0
- e) The number for five hundred forty-eight is
548 584 504